

Year 7

Homework

Booklet

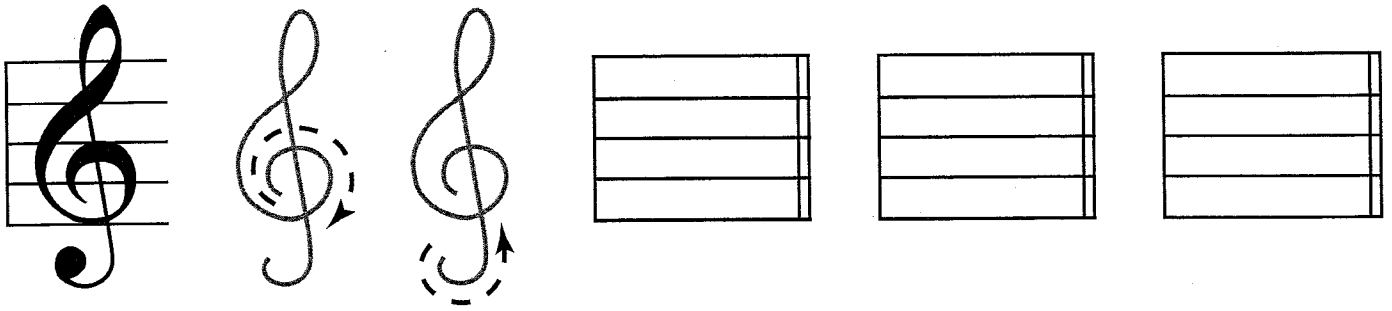
Name	Form
------	------

WWW

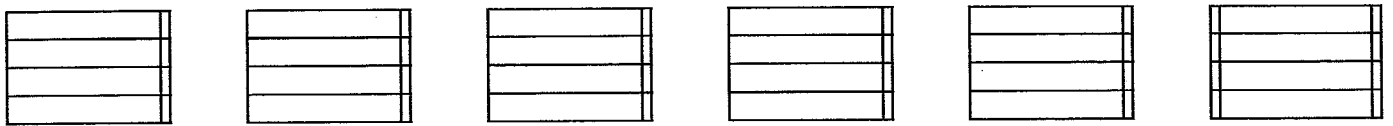
IOTI

Drawing musical symbols | Treble clef


1. Draw a treble clef on each empty staff. Experiment with starting from the tight inner circle and also starting from the tail to see which you prefer – with practice, you’ll be able to draw a perfect clef whichever way you choose:



2. This is the same exercise as the one above, but it’s a little more challenging as the staff is smaller:




3. This time the staff is even smaller again, so this will require a really steady hand and precise curves!

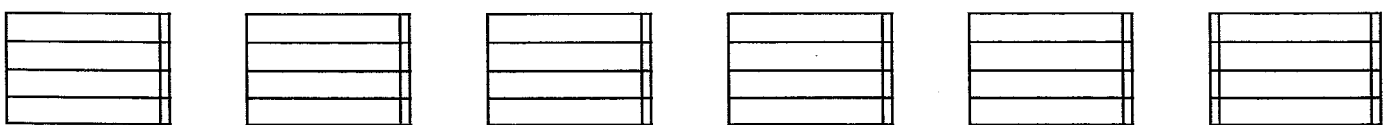


Drawing musical symbols | Bass clef


1. Draw a bass clef on each empty staff. Start with the dot in the centre of the curve then draw around and down as shown by the arrow. Complete the clef by adding the two dots – these need to be more than just a pencil dot to be clearly visible:



2. This is the same exercise as the one above, but it’s a little more challenging as the staff is smaller:



3. This time the staff is even smaller again, so this will require a really steady hand and a precise curve!



Part 1 | Identification | Keys

1. Which are there *more* of on a piano keyboard? (*Tick one box*)

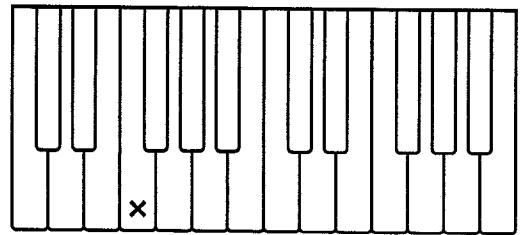
- White keys Black keys

2. One set of keys is raised higher than the others. Which keys are raised? (*Tick one box*)

- White keys Black keys
-

3. In the diagram on the right, is the key marked with an 'X' a white key or a black key on a piano keyboard? (*Tick one box*)

- White key Black key



True or false:

4. C is a white key on a piano keyboard:

- True False

5. F# is a white key on a piano keyboard:

- True False

6. B^b is a black key on a piano keyboard:

- True False
-

7. Which of the following notes are white keys on a piano keyboard? (*Tick one or more boxes*)

- A B C# D E F#

8. Which of the following notes are black keys on a piano keyboard? (*Tick one or more boxes*)

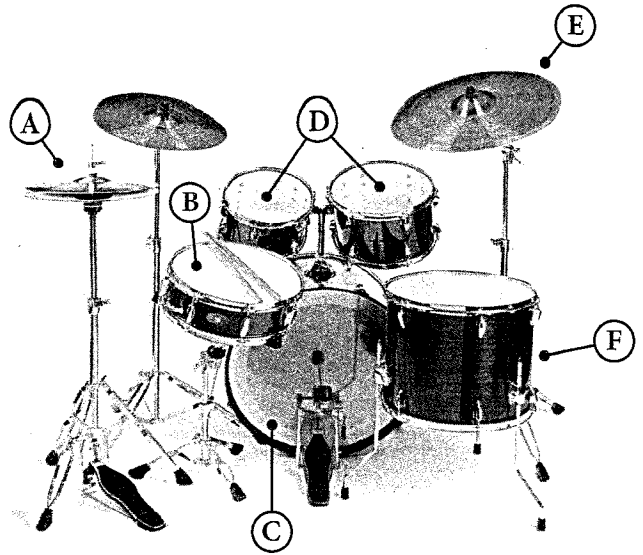
- D E F# G A B
-

Section 3 | Band Knowledge | Part 1 - Identification

Total marks for this section: 20

Mark:

The following three questions refer to the labelled image of a drum kit on the right:



Q 3.01 | Which letter corresponds to the bass drum?

<input type="text"/>	1
----------------------	---

Your answer:

Q 3.02 | Which letter corresponds to the snare drum?

<input type="text"/>	1
----------------------	---

Your answer:

Q 3.03 | Which letter corresponds to the hi-hat?

<input type="text"/>	1
----------------------	---

Your answer:

Q 3.04 | How many strings does a standard electric guitar have?

<input type="text"/>	1
----------------------	---

Your answer:

Q 3.05 | How many strings does a standard bass guitar have?

<input type="text"/>	1
----------------------	---

Your answer:

Q 3.06 | Which instrument is shown in the image below?


	1
--	---



Your answer:

Q 3.07 | Which instrument is shown in the image below?

	1
--	---



Your answer:

Q 3.08 | Which of the following notes correspond to black keys on a piano keyboard? (Tick two boxes)

	2
--	---

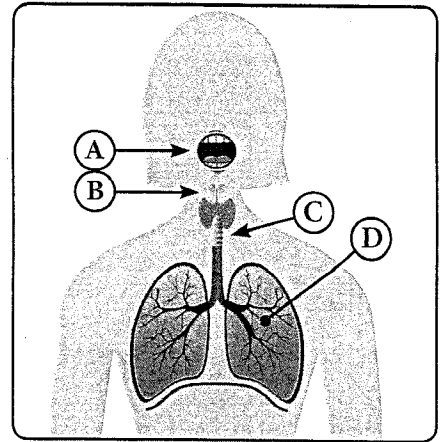
C F# A B^b D[#]

Q 3.09 | On a piano keyboard, what colour is the set of keys that are raised slightly above the others?

	1
--	---

Your answer:

The following two questions refer to the labelled image on the right:



Q 3.10 | Which letter points to the lungs? (Tick one box)

	1
--	---

- A B C D

Q 3.11 | Which letter points to the mouth? (Tick one box)

	1
--	---

- A B C D

Q 3.12 | What is the main function of the lungs? (Tick one box)

	1
--	---

- To allow oxygen to enter the body.
 To allow helium to enter the body.
 To allow carbon dioxide to enter the body.
-

The following two questions relate to the one-bar extract of labelled guitar notation below:



Q 3.18 | Which of the following statements is true? (Tick one box)

	1
--	---

- This bar features quarter-note chords and a melody in eighth notes.
- There are four chords in this bar, all of which are eighth notes.
- This bar features half-note chords and a melody in quarter notes.
- None of the statements above are true.

The following three questions relate to the one-bar extract of labelled piano/keyboard notation below:



Q 3.19 | Which hand or hands play the melody? (Tick one or more boxes)

	1
--	---

- Left
- Right
- Both hands

Q 3.20 | Which hand or hands play an accompaniment? (Tick one or more boxes)

	1
--	---

- Left
- Right
- Both hands

Q 3.21 | Which hand or hands play on beat three? (Tick one or more boxes)

	1
--	---

- Left
- Right
- Both hands

Q 3.22 | Which two vocal groups are usually female singers? (*Tick one box*)

	1
--	---

- Soprano and bass
 - Soprano and alto
 - Alto and tenor
-

Q 3.23 | Which of these three vocal groups has the highest pitch range? (*Tick one box*)

	1
--	---

- Bass
 - Soprano
 - Tenor
-

Q 3.24 | Which of these three vocal groups has the lowest pitch range? (*Tick one box*)

	1
--	---

- Alto
 - Bass
 - Soprano
-